




Match each equation to answer and write the answer.


Answers

Ex) $\frac{1}{12} + \frac{1}{12} + \frac{1}{12} + \frac{1}{12} + \frac{1}{12} + \frac{1}{12}$



Ex. 0

1) $\frac{1}{10} + \frac{1}{10} + \frac{1}{10}$



1. _____

2) $\frac{1}{5} + \frac{1}{5} + \frac{1}{5}$




2. _____

3) $\frac{1}{5} + \frac{1}{5} + \frac{1}{5} + \frac{1}{5}$



3. _____

4) $\frac{1}{4} + \frac{1}{4}$



5. _____

5) $\frac{1}{10} + \frac{1}{10} + \frac{1}{10}$




6. _____

6) $\frac{1}{10} + \frac{1}{10} + \frac{1}{10} + \frac{1}{10} + \frac{1}{10}$




7. _____

7) $\frac{1}{8} + \frac{1}{8}$




8. _____

8) $\frac{1}{10} + \frac{1}{10}$




9. _____

9) $\frac{1}{5} + \frac{1}{5} + \frac{1}{5}$




10. _____

10) $\frac{1}{4} + \frac{1}{4}$



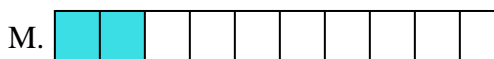
11. _____

11) $\frac{1}{5} + \frac{1}{5} + \frac{1}{5}$




12. _____

12) $\frac{1}{8} + \frac{1}{8} + \frac{1}{8} + \frac{1}{8}$




13. _____

13) $\frac{1}{3} + \frac{1}{3}$



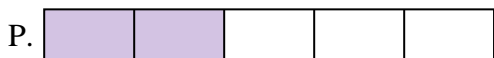
14. _____

14) $\frac{1}{5} + \frac{1}{5} + \frac{1}{5}$



15. _____


15) $\frac{1}{5} + \frac{1}{5}$





Match each equation to answer and write the answer.


Ex) $\frac{1}{12} + \frac{1}{12} + \frac{1}{12} + \frac{1}{12} + \frac{1}{12} + \frac{1}{12}$



Answers

Ex. O

1) $\frac{1}{10} + \frac{1}{10} + \frac{1}{10}$



1. B

2) $\frac{1}{5} + \frac{1}{5} + \frac{1}{5}$




2. L

3) $\frac{1}{5} + \frac{1}{5} + \frac{1}{5} + \frac{1}{5}$



3. H

4) $\frac{1}{4} + \frac{1}{4}$



4. D

5) $\frac{1}{10} + \frac{1}{10} + \frac{1}{10}$



5. B

6) $\frac{1}{10} + \frac{1}{10} + \frac{1}{10} + \frac{1}{10} + \frac{1}{10}$




6. N

7) $\frac{1}{8} + \frac{1}{8}$




7. K

8) $\frac{1}{10} + \frac{1}{10}$



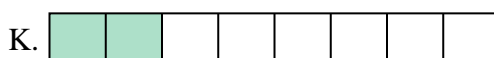
8. M

9) $\frac{1}{5} + \frac{1}{5} + \frac{1}{5}$




9. L

10) $\frac{1}{4} + \frac{1}{4}$



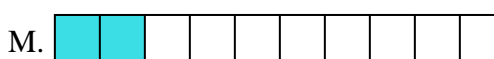
10. D

11) $\frac{1}{5} + \frac{1}{5} + \frac{1}{5}$




11. L

12) $\frac{1}{8} + \frac{1}{8} + \frac{1}{8} + \frac{1}{8}$



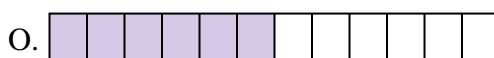
12. C

13) $\frac{1}{3} + \frac{1}{3}$



13. F

14) $\frac{1}{5} + \frac{1}{5} + \frac{1}{5}$



14. L

15) $\frac{1}{5} + \frac{1}{5}$



15. P